


**FP PUZZLES (PAIR)**

**Give each face a name**

These are the faces of **SAM, SINO AND SIYA**.












Use the clues to work out which name goes with each face.

**Clues**

- Sino and Siya are smiling
- Siya and Sam have big noses
- Sam is sad
- Sino has hair

- In this grid, each shape stands for a number.
- The numbers shown are the totals of the line of three numbers in the row or column.
- Find the remaining totals.
- Say what number each shape stands for

			<i>11</i>
			
			<i>14</i>
<i>10</i>	<i>15</i>		

