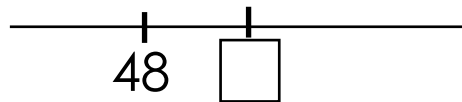
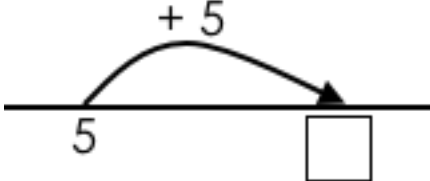
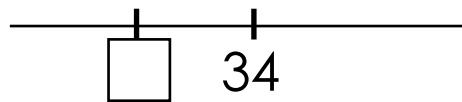


NAME	
-------------	--

PART ONE
2 MINUTES FOR THIS PAGE

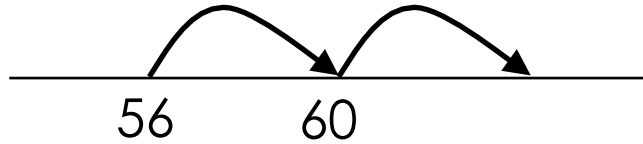
1 $7 + 3 = \square$	11 $50 + 6 = \square$				
2 $2 + 8 = \square$	12 $60 + 3 = \square$				
3 $10 = 7 + \square$	13 $40 + 8 = \square$				
4 8 less than 10 is \square	14 $40 - 7 = \square$				
5 <table border="1" style="width: 100%; height: 60px; border-collapse: collapse; margin: 5px;"> <tr> <td style="width: 20%; text-align: center; vertical-align: middle;">2</td> <td style="width: 80%;"></td> </tr> <tr> <td style="width: 20%;"></td> <td style="width: 80%; text-align: center; vertical-align: middle;">10</td> </tr> </table>	2			10	15 The next 10? 
2					
	10				
6 	16 $100 + 27 = \square$				
7 $10 - 5 = \square$	17 The 10 before? 				
8 $10 - 4 = \square$	18 $\square + 8 = 50$				
9 <table border="1" style="width: 100%; height: 60px; border-collapse: collapse; margin: 5px;"> <tr> <td style="width: 20%; text-align: center; vertical-align: middle;">1</td> <td style="width: 80%;"></td> </tr> <tr> <td style="width: 20%;"></td> <td style="width: 80%; text-align: center; vertical-align: middle;">9</td> </tr> </table>	1			9	19 $30 - \square = 27$
1					
	9				
10 $\square + 2 = 10$	20 $87 = 80 + \square$				

Total out of 20:	
-------------------------	--

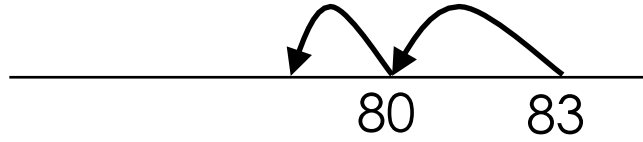
PAGE INTENTIONALLY BLANK

PART TWO
1 MINUTE FOR THIS PAGE

1 $56 + 8 = \square$



2 $83 - 4 = \square$



3 $93 - 7 = \square$

4 $67 + \square = 73$

5 $\square + 7 = 82$

Total out of 5:

PART THREE
1 MINUTE FOR THIS PAGE

1 $67 + 5 = 67 + 3 + \square$

2 $98 + 56 = 98 + 2 + \square$

3

$98 + \square + \square = 136$

4 $96 + \square = 96 + 4 + 32$

5

$103 - \square = 95$

Total out of 5: